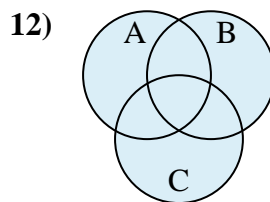
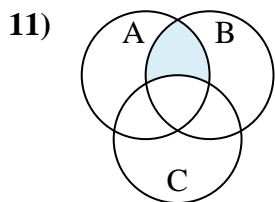
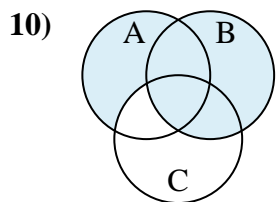
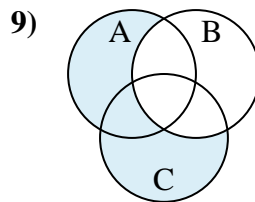
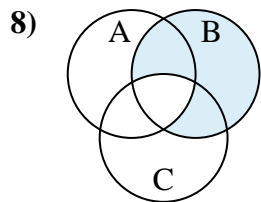
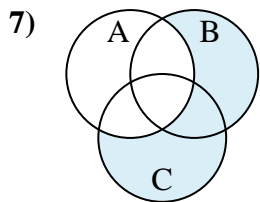
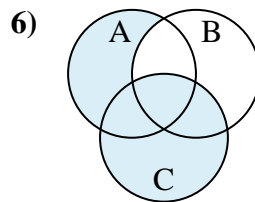
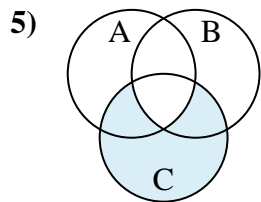
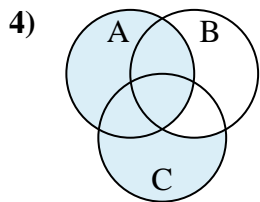
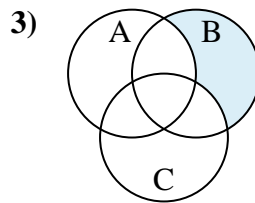
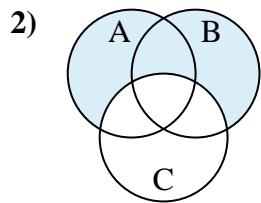
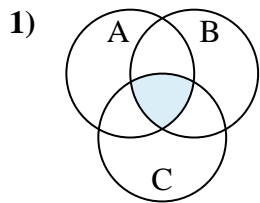




Determine the shaded region of each diagram.

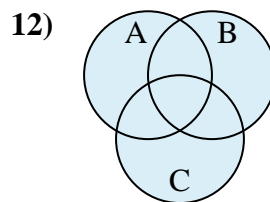
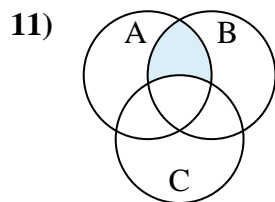
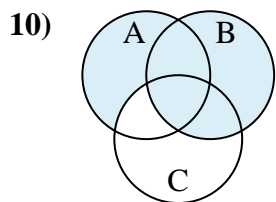
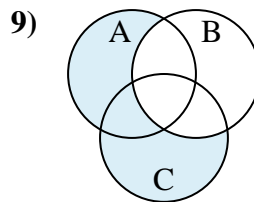
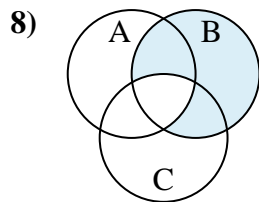
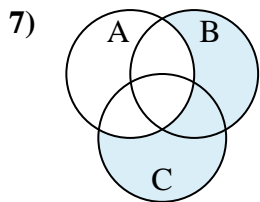
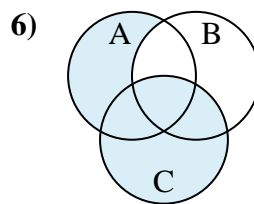
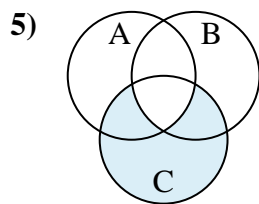
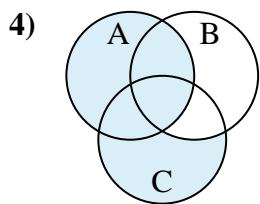
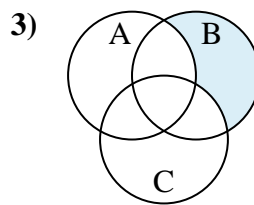
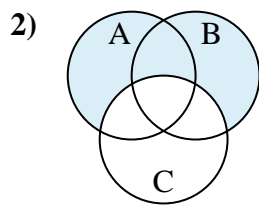
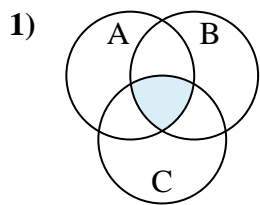


Answers

1. \_\_\_\_\_
2. \_\_\_\_\_
3. \_\_\_\_\_
4. \_\_\_\_\_
5. \_\_\_\_\_
6. \_\_\_\_\_
7. \_\_\_\_\_
8. \_\_\_\_\_
9. \_\_\_\_\_
10. \_\_\_\_\_
11. \_\_\_\_\_
12. \_\_\_\_\_



Determine the shaded region of each diagram.



**Answers**

1.  $C \cap A \cap B$
2.  $(B \cup A) - C$
3.  $B - (C \cup A)$
4.  $A \cup (C - B)$
5.  $C - (A \cap B)$
6.  $C \cup (A - B)$
7.  $(B \cup C) - A$
8.  $B - (A \cap C)$
9.  $(C \cup A) - B$
10.  $B \cup (A - C)$
11.  $A \cap (B - C)$
12.  $A \cup C \cup B$